

Math 1

Evaluate function and Plot#2

Name: \_\_\_\_\_

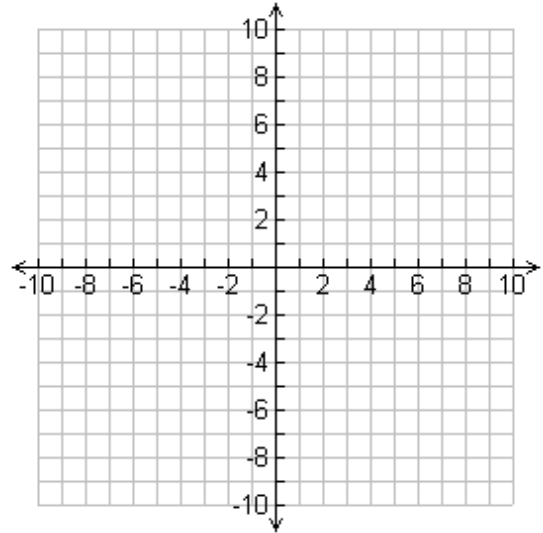
Given the coordinate in function notation; a) Rewrite the coordinate as (x, y) b) Plot the point on the graph and c) give the quadrant the point lies in.

a.  $f(1) = 3$

b.  $f(-2) = -4$

c.  $f(-3) = 4$

d.  $f(5) = -3$



Given the coordinate in function notation; a) Rewrite the coordinate as (x, y) b) Plot the point on the graph and c) give the quadrant the point lies in.

a.  $f(-1) = 5$

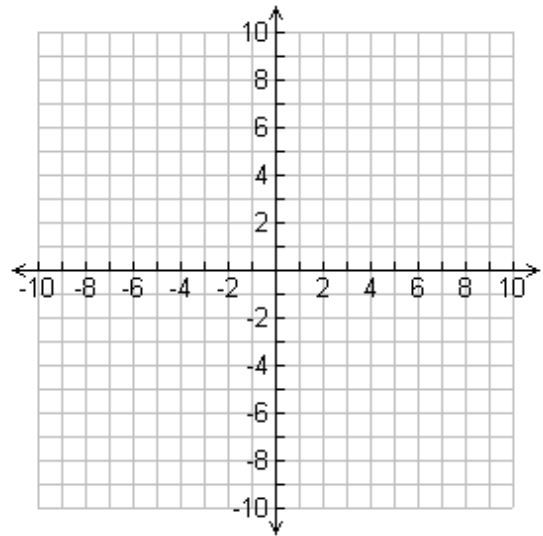
b.  $f(2) = -6$

c.  $f(-5) = 10$

d.  $f(3) = -5$

e)  $f(0) = -4$

f)  $f(-5) = 0$



For each of the following functions: evaluate the given function and then write your problem in terms of  $(x, y)$ . Plot the points and connect.

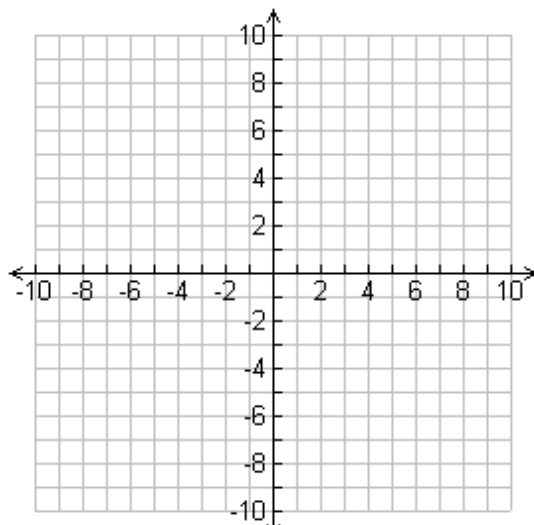
1. Let  $g(x) = 6 - x$

a.  $g(-4) =$

b.  $g(1) =$

c.  $g(-2) =$

d.  $g(0) =$



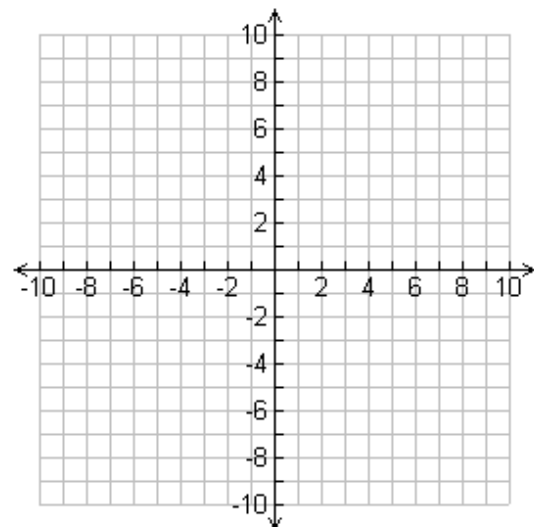
2. Let  $h(x) = -3x - 1$

a.  $h(-1)$

b.  $h(3)$

c.  $h(-3)$

d.  $h(0)$



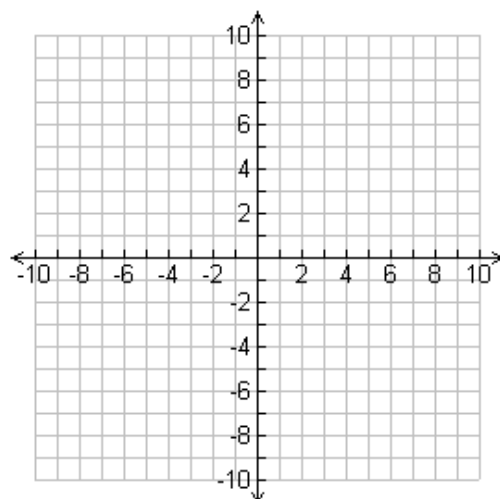
3. Let  $j(x) = 5 - \frac{2}{3}x$

a.  $j(9)$

b.  $j(6)$

c.  $j(0)$

d.  $j(3)$



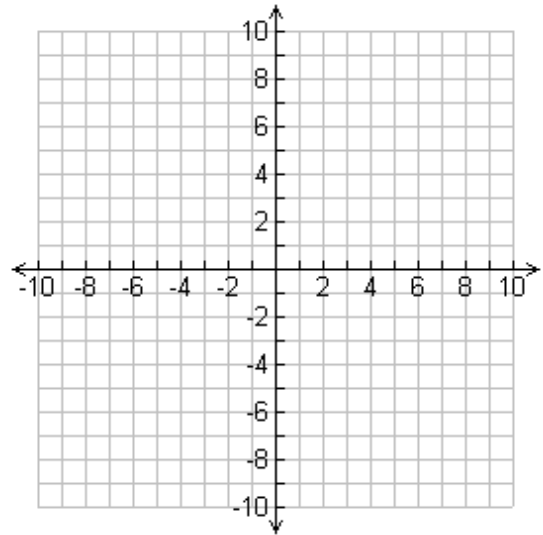
Given the coordinate in function notation; a) Rewrite the coordinate as (x, y) b) Plot the point on the graph and c) give the quadrant the point lies in.

a.  $f(-2) = 5$

b.  $f(-5) = -4$

c.  $f(3) = 2$

d.  $f(5) = -1$



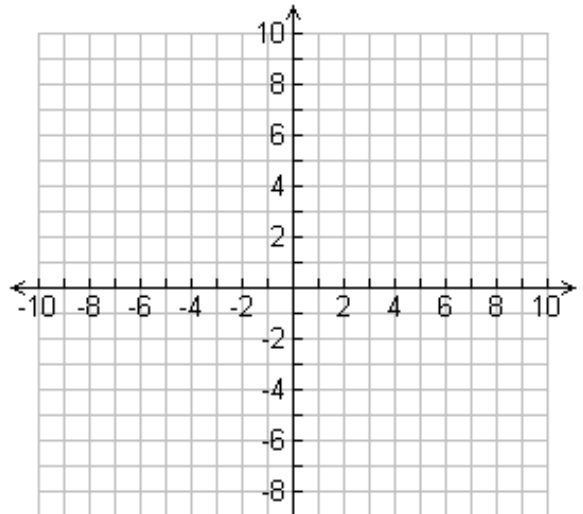
4. Let  $f(x) = 6x + 2$

a.  $f(-1)$

b.  $f(0)$

c.  $f(-2)$

d.  $f(1)$



5. Let  $f(x) = -2x + 1$

a.  $f(-3)$

b.  $f(2)$

c.  $f(-5)$

d.  $f(4)$

