

Math 3

Name _____

Polynomial and Rational Function

Date _____

Lesson 2 Practice Quiz

1. Consider the quadratic function $f(x) = x^2 + 6x + 2$. Complete each task by algebraic reasoning alone. Show all of your work to support your answer.
 - a. Rewrite the function in vertex form.

 - b. Does the graph of this function have a maximum or minimum? Determine the coordinates of the maximum or minimum point of the graph of this function.

 - c. What are the coordinates of the x-intercepts of the graph of this function?

 - d. What are the coordinates of the y-intercept of the graph of this function?

2. Rewrite each quadratic in vertex form and give the vertex.

a. $y = x^2 - 6x - 11$

b. $y = x^2 - x - 3$

c. $y = x^2 + 12x - 10$

3. Use the quadratic formula, factoring, or complete the square to solve each of these quadratics. Identify each solution as rational, irrational, or complex. Write non-real complex solutions in standard form $a + bi$. Must use each method once.

a. $2x^2 + 3x - 5 = 0$

b. $2x^2 + x - 3 = 0$

c. $3x^2 + x + 10 = 0$

d. $x^2 + 5x + 10 = 0$

e. $3x^2 + 2x + 1 = 0$

f. $x^2 - 5x = -5$

g. $4x(x + 5) + 29 = 0$

h. $9x^2 - 6x + 2 = 0$

4. Write $y = (x - 4)(x + 9)$ in standard form.

5. Write $y = -2(x + 5)^2 + 2$ in standard form.

6. Write $y = 2(x - 2)^2 - 2$ in intercept form.

7. Perform the indicated operation and write your answer in standard form.

a. $(3 + 4i) + (5 - 6i)$

b. $(7 - 3i) - (4 + 2i)$

b. $(5 - 6i) + 5i + (7 + 6i)$

d. $(-1 + i) - (-7 + 4i) - 5$

e. $2i(7 + 2i)$

f. $(5 - 4i)(2 + 3i)$

g. $(-2 + 4i)^2$

Graph the following equation.

$$y = a(x-h)^2 + k$$

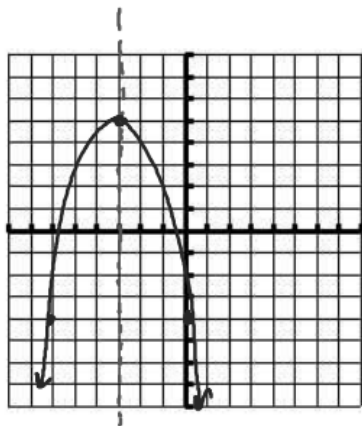
$$y = -(x+3)^2 + 5$$

Vertex $(-3, 5)$

Axis of Symmetry $x = -3$

Maximum or Minimum?

y-intercept $(0, -4)$



$$\begin{aligned} y &= -(0+3)^2 + 5 \\ &= -(3)^2 + 5 \\ &= -9 + 5 \\ &= -4 \end{aligned}$$

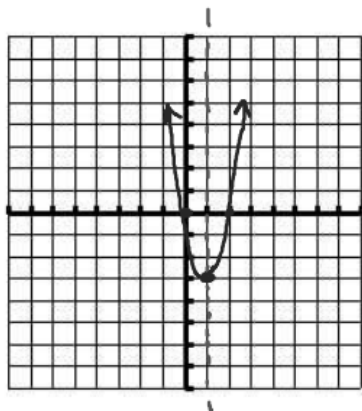
$$y = 3(x-1)^2 - 3$$

Vertex $(1, -3)$

Axis of Symmetry $x = 1$

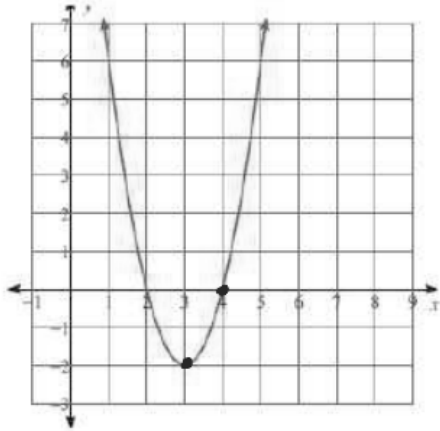
Maximum or Minimum?

y-intercept $(0, 0)$



$$\begin{aligned} y &= 3(0-1)^2 - 3 \\ &= 3(-1)^2 - 3 \\ &= 3 - 3 \\ &= 0 \end{aligned}$$

Write the equation for the parabola.



$$V \begin{matrix} h & k \\ (3, & -2) \end{matrix} \quad \begin{matrix} x & y \\ (4, & 0) \end{matrix}$$

$$y = a(x-h)^2 + k$$

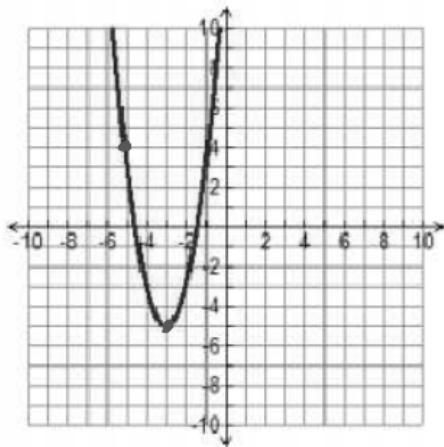
$$0 = a(4-3)^2 - 2$$

$$0 = a(1)^2 - 2$$

$$0 = a - 2$$

$$a = 2$$

$$y = 2(x-3)^2 - 2$$



$$V \begin{matrix} h & k \\ (-3, & -5) \end{matrix} \quad \begin{matrix} x & y \\ (-5, & 4) \end{matrix}$$

$$y = a(x-h)^2 + k$$

$$4 = a(-5+3)^2 - 5$$

$$4 = a(-2)^2 - 5$$

$$4 = 4a - 5$$

$$9 = 4a$$

$$a = \frac{9}{4}$$

$$y = \frac{9}{4}(x+3)^2 - 5$$