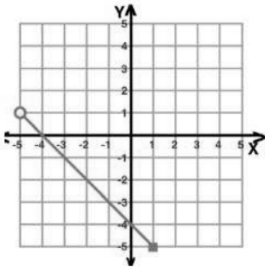
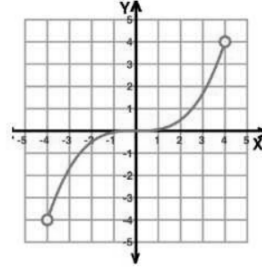


Find the domain and range for each



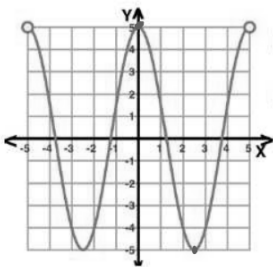
Domain: $(-5, 1]$

Range: $[-5, 1)$



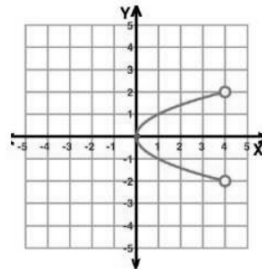
Domain: $(-4, 4)$

Range: $(-4, 4)$



Domain: $(-5, 5)$

Range: $[-5, 5]$



Domain: $[0, 4)$

Range: $(-2, 2)$